

Total No. of printed pages = 5

END SEMESTER EXAMINATION - 2021

Semester : 5th

Subject Code : AMT-504

FUNDAMENTAL OF FILM MAKING

Full Marks : 70

Time - Three hours

The figures in the margin indicate full marks for the questions.

Instructions :


1. *All* questions of PART - A are compulsory.
2. Illustrate your answers with suitable sketches and examples wherever necessary.

PART - A

Marks - 25

1. Write true or false : 1×5=5
 - (i) Long shot is sometimes called "Establishing shot".
 - (ii) Production designer creates the visual conception of the film.

[Turn over



(iii) Director finds actors to fill the parts in the script.

(iv) Art Director creates new music for the film.

(v) Two-Shot contains two subjects.

2. Match the following terms from Column-A with Column-B : $1 \times 5 = 5$

A	B
(i) Documentary	(a) Transition
(ii) Action	(b) Fiction
(iii) Camera	(c) Close-up
(iv) Cut	(d) Film Genre
(v) Shot	(e) Pan

3. Read the following questions carefully and chose the letter (a, b, c or d) that best describes the answer. $1 \times 5 = 5$


(i) The head of the photography of the entire film is called

(a) Director of photography

(b) Cinematographer

9/AMT-504/FoFM

(2)





- (c) Camera Operator
- (d) Choreographer
- (ii) A Complex shot have _____
- (a) Lens movement only
- (b) Camera movement
- (c) Lens and Camera movement
- (d) None of the above
- (iii) Developing shot have _____.
- (a) Lens and Mount movement
- (b) Lens, Camera and Mount movement
- (c) Mount movement only
- (d) None of the above
- (iv) Development is the _____ stage of production.
- (a) 1st (b) 2nd
- (c) 3rd (d) None of these

(v) Plot Point-II

- (a) Reveals inciting incident
- (b) Sets up what Act Two is going to be
- (c) Turn the story in a new direction
- (d) All of the above

4. Answer the following in short : $2 \times 5 = 10$

- (a) What is Act Structure ?
- (b) What do you mean by term Protagonist ?
- (c) What do you mean by Screenplay ?
- (d) What hat do you mean by Plot ?
- (e) What do you mean by Shot ?

PART - B

Marks - 45

Answer Q. No. 1 and any 2 (*two*) from the following.


1. Write down the role of any 3 (*three*) from the following : $5 \times 3 = 15$

- (a) Production Designer
- (b) Producer

9/AMT-504/FoFM

(4)

60(W)



- (c) Director of Photography
- (d) Casting Director.
2. (a) What are the stages of Film Making ? 5
- (b) Describe the Pre-Production stage of Film Making. 10
3. (a) Describe the "Rule of 30 Degree". 7
- (b) Describe "Rule of 180 degree" with suitable drawing. 8
4. (a) What are the basic type of shots ? 5
- (b) Describe briefly the type of shots ? 10
5. (a) What is Documentary film ? 5
- (b) Describe the production process of the Documentary film. 10

